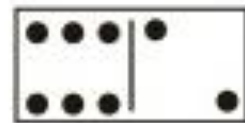

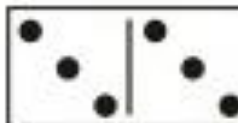
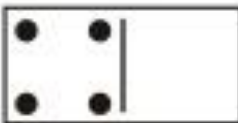


Cilja:

- Učenec sešteva in odšteva v množici naravnih števil do 10, vključno s številom 0.

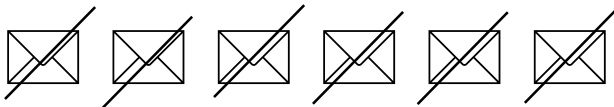
NAPIŠI RAČUN IN SEŠTEJ.





— / —

NAPIŠI RAČUN IN ODŠTEJ.



— / —

REŠI.

+3


2	
5	
0	
7	
6	
4	

-4

8	
6	
10	
4	
9	
5	

— / —

NAPIŠI RAČUN IN SEŠTEJ.











— / —

NAPIŠI RAČUN IN ODŠTEJ.









— / —

NAPIŠI RAČUN IN IZRAČUNAJ.



— / —

SEŠTEJ ALI ODŠTEJ.

$2 + 2 = \square$

$9 - 5 = \square$

$8 - 0 = \square$

$4 + 3 = \square$

$6 - 1 = \square$

$2 + 5 = \square$

$6 + 0 = \square$

$10 - 10 = \square$

$7 - 4 = \square$

$1 + 7 = \square$

$8 - 7 = \square$

$3 + 7 = \square$

— / —

SEŠTEJ ALI ODŠTEJ.

$3 + 2 = \square$

$6 - 5 = \square$

$10 - 8 = \square$

$4 - 3 = \square$

$8 - 1 = \square$

$1 + 5 = \square$

$5 + 4 = \square$

$10 + 0 = \square$

$9 - 5 = \square$

$7 - 7 = \square$

$2 + 7 = \square$

$6 + 2 = \square$

— / —