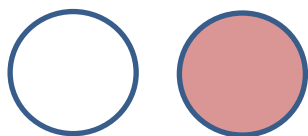
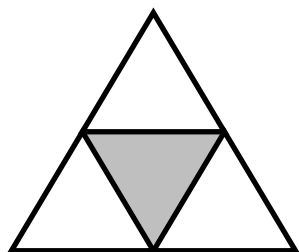


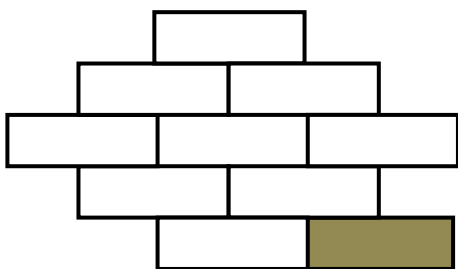
MATEMATIKA – 8. URA: DELI CELOTE

Prepiši naloge v zvezek in reši.

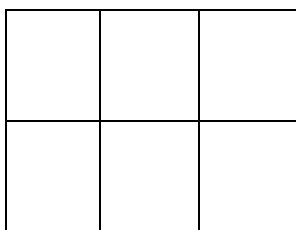
Z besedo in ulomkom zapiši, kolikšen del celote je označen.





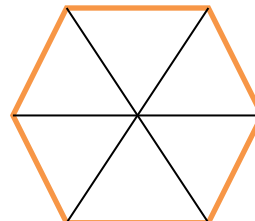




Reši.




Lik je razdeljen na _____ delov. Pobarvaj $\frac{1}{2}$ lika.

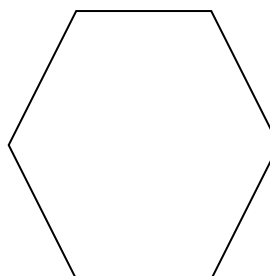
Pobarvaj eno šestino vsakega lika.



Krog razdeli na četrtine.



Šestkotnik razdeli na šestine.



Trak je razdeljen na 9 enakih delov. Pobarvaj eno tretjino traku.

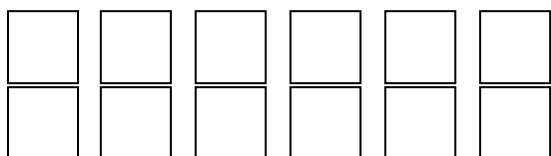


Koliko delov si pobarval?

Odgovor: _____

Ustrezno pobarvaj in odgovori.

Jan je narisal 12 kvadratov. Ena četrtina je rumenih, ostali so modri.



Koliko kvadratov je pobarval rumeno? _____

Ali je modrih kvadratov več kot polovica? _____